


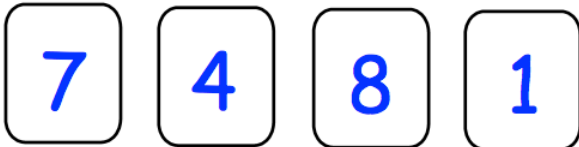


Sketch an isosceles triangle

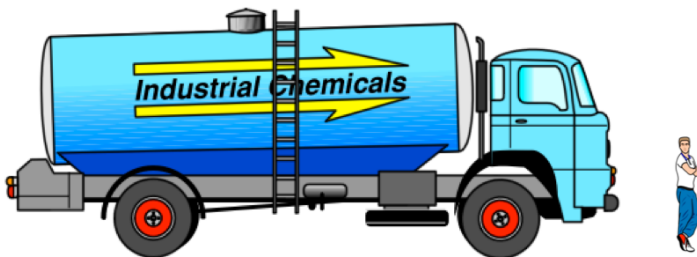
Sketch a right angled triangle



What fraction of this grid is shaded?



Write down the largest **even** number you can using all four cards



The scale diagram shows a man and a lorry.

The man is 6 feet tall.

Estimate the length of the lorry in feet.