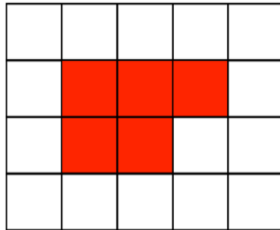
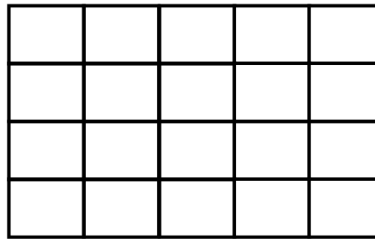




Shaded three fifths of this grid



Shown is a shape drawn on centimetre square grid

Find the area of the shape.

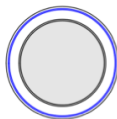
Find the perimeter of the shape.

Arrange the following numbers in order, from smallest to largest

0.61 59% 0.6 62%

Small pack
Contents
3 plates

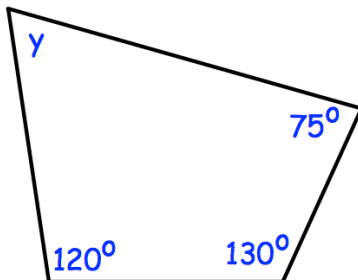
£5.25



Large pack
Contents
12 plates

£21.24

Which is better value for money?



Find the size of y