

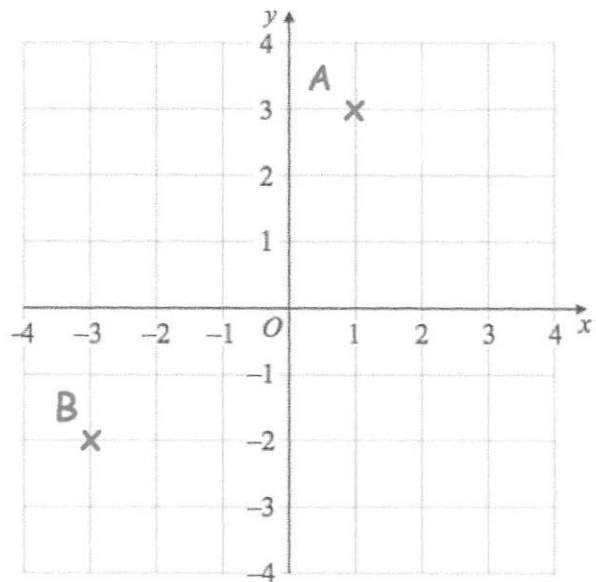
Work out 10^2

$$10 \times 10 = 100$$

Work out $5^2 + 4^2$

$$25 + 16 = 41$$

Write down the coordinates of the point A.

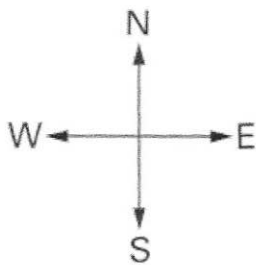

$$(1, 3)$$


Write down the coordinates of the point B.

$$(-3, -2)$$

What fraction of the grid is shaded?

$$\frac{15}{35} = \frac{3}{7}$$



Maciej is facing South.
He turns clockwise through 90 degrees.

Which direction is he now facing?

west