



Fred has 13 twenty pence pieces.

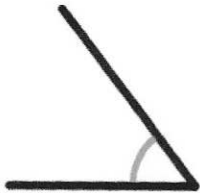
What is the total value of these coins?

£ 2.60

Mary has 200 fifty pence pieces.


What is the total value of these coins?

£ 100



What type of angle is above?

Acute



What type of angle is shown above?

Obtuse

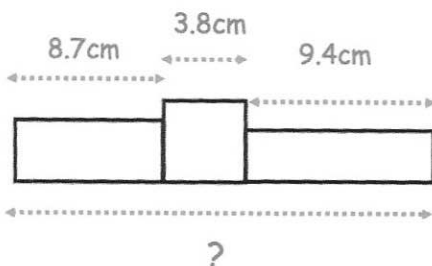
Work out

$\frac{4}{9}$  of 72kg

$$72 \div 9 = 8$$

$$8 \times 4 = 32$$

32kg



Find the total length of the three blocks

21.9cm

Here are the first four terms of a number sequence.

12 15 18 21 24

Write down the next term of the number sequence

Explain how you found your answer.

Increasing by 3.

(add 3)