

15th August

Foundation 5-a-day



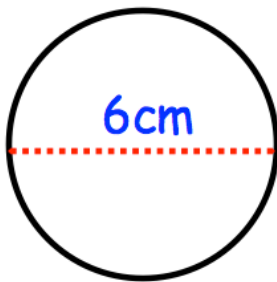
Corbettmαths

100 people play a game that costs £1
The probability of winning is 0.1
The prize is £4.

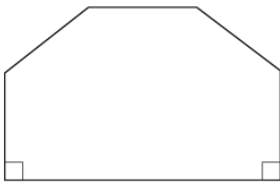
Calculate how much profit the game makes.

4kg of tomatoes is £4.80

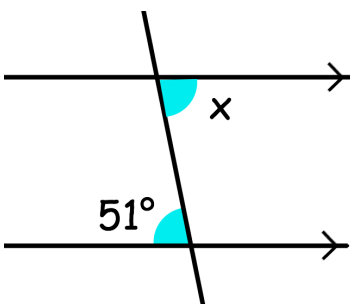
How much does 3kg cost?



Calculate the circumference of this circle, to one decimal place.



The front of a house is in the shape of a hexagon with two right angles.
The other four angles are all the same size.
Calculate the size of one of these angles.



Find x

Reason