

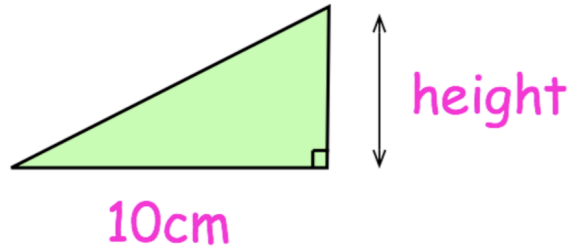


Carol claims “when you square a number, the answer is always bigger than the number you started with.”

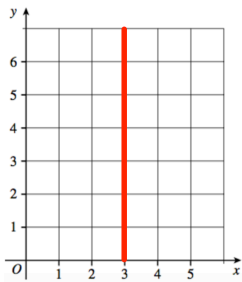
Is she correct? Explain your answer.

The area of a triangle is 30cm^2

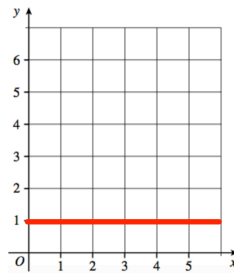
Find the height of the triangle



What is the equation of this line?

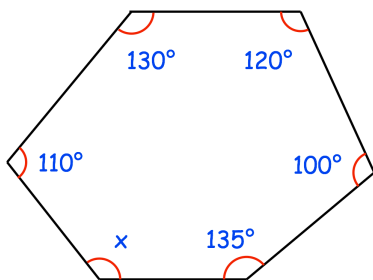


What is the equation of this line?



Work out an estimate to

$$\begin{array}{r} 49.1 \times 8.08 \\ \hline 3.98 \end{array}$$



Find x