

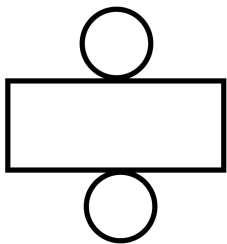
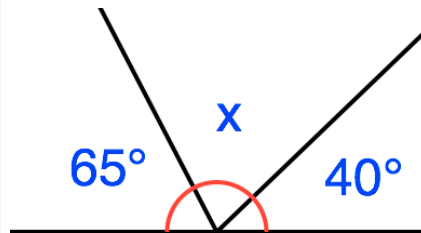


39×12

128×3

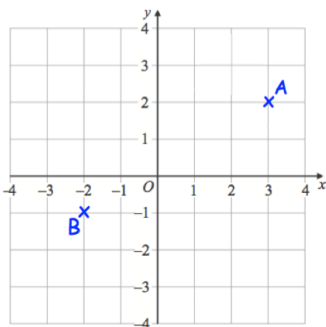
Work out $19.6 - 12.7$

Work out the size of the angle x



This is the net for a 3D shape.

Sketch the 3D shape.



Write down the coordinates of A.

Write down the coordinates of B.