



Work out

$$0.438 \div 3$$

Work out

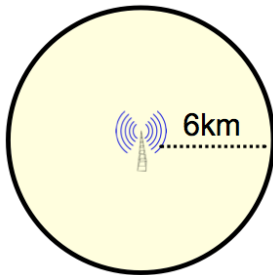
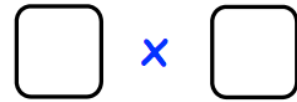
$$0.019 \times 0.24$$

Emily has the following cards

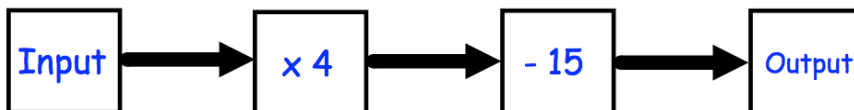


Emily is going to choose two cards and multiply the numbers on them.

What cards should Emily choose to make the largest possible answer?



Find the area of the circle



Work out the output, when the input is 20.

If the input is the same as the output, work out the input.