

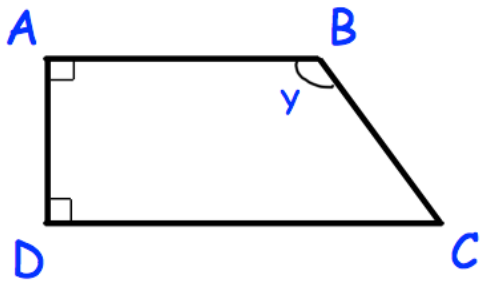


Simplify

$$3a + 2w - 5a - 9w$$

Work out

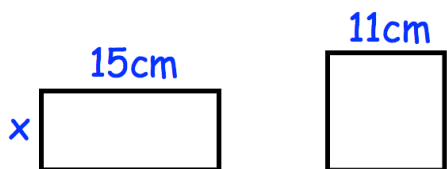
$$\frac{2}{3} \div \frac{8}{11}$$



obtuse perpendicular acute
parallel reflex

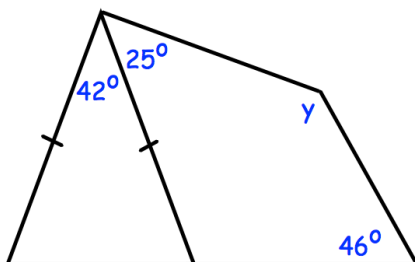
AB is to AD.

DC is to AB.



The perimeter of the rectangle and the square are the same.

Find the width of the rectangle, x.



Find y