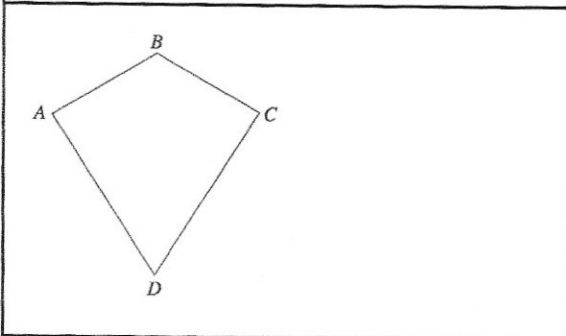


26th August

Foundation 5-a-day



Corbettm@ths



Is AB parallel to CD?

No

Does Angle A = Angle C?

Yes

Convert 0.14 into a fraction in its simplest form.

$$\frac{14}{100} = \frac{7}{50}$$

Convert 80% into a fraction in its simplest form.

$$\frac{4}{5}$$

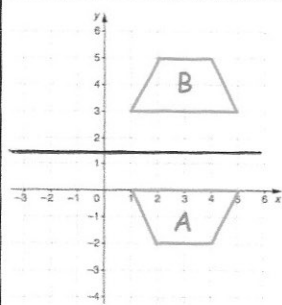
Martin and Laura share 415 sweets in the ratio 1:4.

$$1+4=5$$

How many sweets does Laura receive?

$$\begin{array}{r} 83 \\ 5 \overline{)415} \end{array}$$

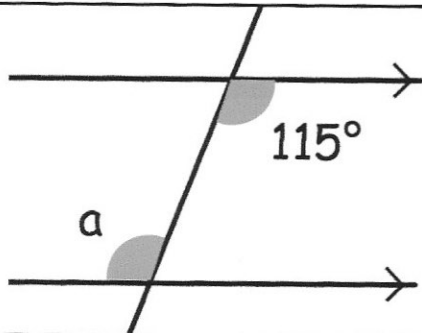
$$83 \times 4 = 332$$



B is a reflection of A.

What is the equation of the mirror line?

$$y = 1.5$$



Size of a?

$$115^\circ$$

Reason?

alternate angles