



Miss Jones gives her class a test.
The test is out of 40 marks.

Here are their scores.

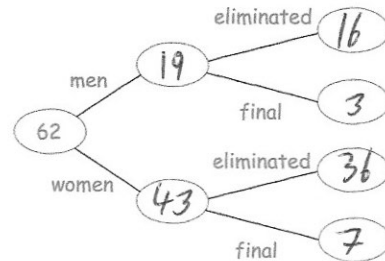
75% of $40 = 30$
 (31) 29 20 (35)
 (32) (38) (32)

The pass mark is 75%

How many students pass?


5

62 people took part in a talent show
43 of the people were women.
10 people made it through to the final
and the rest were eliminated.
3 men made it through to the final.
3 men made it through to the final.
Complete the frequency tree



Write an expression for the distance from Antrim to Lisburn

$13a - 4$

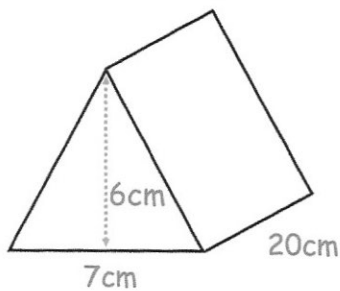


Cooking oil is sold in two sizes of cans.

Which size of can gives the better value for money?

$220 \div 4 = 55p$ per litre
 $324 \div 6 = 54p$ per litre

6 litre can is better value



Find the volume of the prism.

$\frac{1}{2} (7 \times 6) = 21$
 $21 \times 20 = 420 \text{ cm}^3$