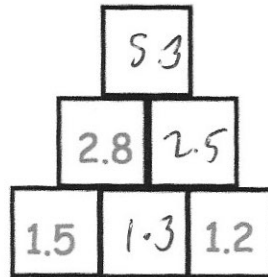


The number in each block is found by adding the two blocks directly beneath it.

Find the missing numbers.



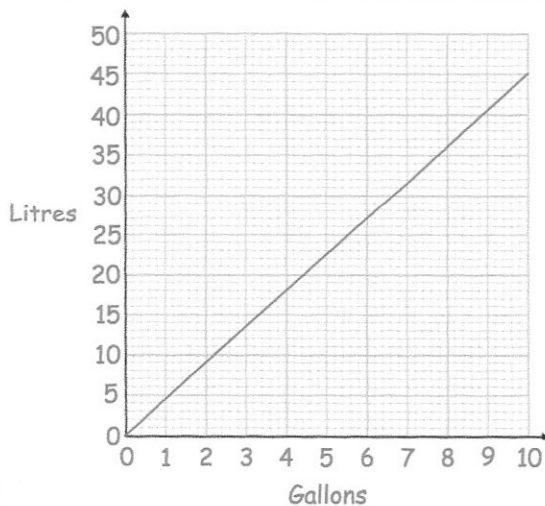
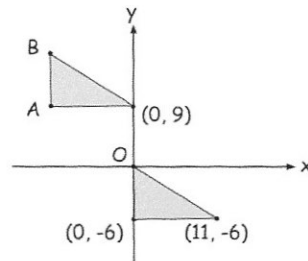
Find the mean of

$$4 + 2 + 5 + 8 + 6 + 4 + 2 + 3 + 5 + 1 = 40$$

$$40 \div 10 = 4$$

Here are two identical triangles. Write down the coordinates of point B.

$$(-11, 15)$$



Use the graph to convert 6 gallons to litres.

27 Litres

Use the graph to convert 10 litres to gallons.

2.2 gallons