



Work out $\sqrt[3]{1000}$




10

Write down the ratio of 50g to 1kg.
Give your answer in its simplest form.

50 : 1000

1 : 20

Write the correct symbol in each box
to make the statements correct



$$\overset{900}{75 \times 12} \quad \boxed{<} \quad \overset{1200}{30 \times 40}$$

$$\overset{64}{4^3} \quad \boxed{>} \quad \overset{62}{50 + 6 \times 2}$$

$$\overset{0}{4 \times 3 \times 2 \times 1 \times 0} \quad \boxed{<} \quad \overset{1}{4,444 \div 4,444}$$

$$\overset{-1}{2 - 3} \quad \boxed{>} \quad \overset{-10}{20 - 30}$$

There are 50 sweets in a jar.
15 of the sweets are yellow and the rest
are red. 35

A sweet is picked at random.

Find the probability that the sweet is red.

$$\frac{35}{50} = \frac{7}{10}$$