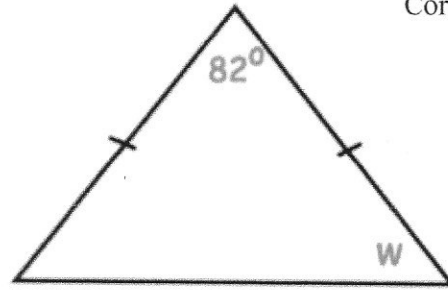


Find  $w$ 

$$180 - 82 = 98$$

$$98 \div 2 = 49^\circ$$



Here is a list of quadrilaterals.

kite      rectangle      rhombus  
square      parallelogram

For the following description, choose the correct name from the list.


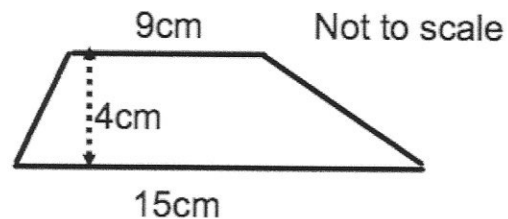
All four sides are the same length.  
There are no right angles.

rhombus

Calculate the area of the trapezium.

$$\frac{1}{2} (9 + 15) \times 4$$

$$12 \times 4 = 48 \text{ cm}^2$$



Ben rolls a dice and flips a coin.  
He could get a Tail and a 1 (T1).

Write a list of all the other possible outcomes.

T2    T3    T4    T5    T6  
H1    H2    H3    H4    H5    H6

Is time taken to read a book discrete or continuous data?

Discrete

Continuous

Give a reason for your answer.

can take any value.