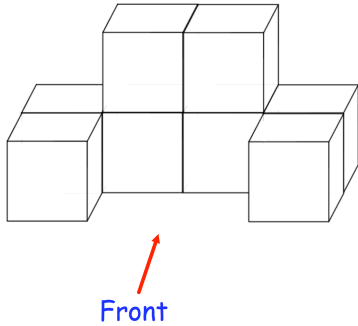




18% is greater than 0.2




Is Ibrahim correct?
Explain your answer.




Shown is the view from the front of a shape.

Draw the side elevation.



Draw the plan view.



Two fair six sided dice are rolled.



The numbers on the two dice are **multiplied** together to give a score.
Complete the table

		Dice 1					
		1	2	3	4	5	6
Dice 2	1						
	2						
	3						
	4						
	5						
	6						

Find the probability of a score of 12

Find the probability of a score of 10 or more