

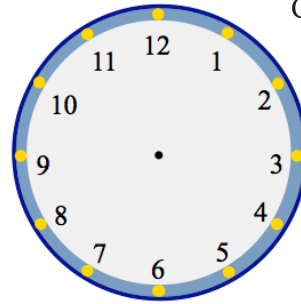
10th July

Numeracy 5-a-day

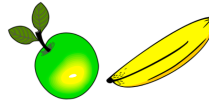


Corbettmαths

Show the time 10:45pm on the clock



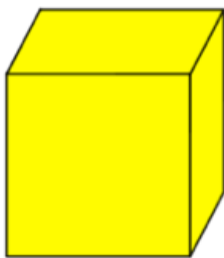
Juliana buys an apple for 41p and a banana for 27p.



How much more expensive are 5 apples than 5 bananas?

Simon has made a mistake.  
Explain his mistake.

$$\begin{array}{r} 8 \quad 5 \quad 9 \\ + \quad 1 \quad 7 \quad 6 \\ \hline 1 \quad 0 \quad 2 \quad 5 \end{array}$$



How many edges does a cube have?

Simplify fully

$$\frac{25}{35}$$