

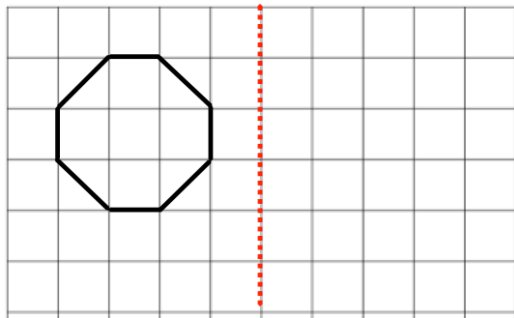


Round 128.4 to the nearest whole number

Round 8.72 to the nearest whole number

Mrs Pearce goes shopping at a supermarket.
The bill is £102.51 but she has a voucher for £15.68

How much more does she need to pay?

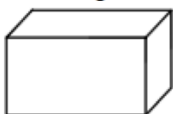


Reflect the shape in the mirror line.

$$1240 \div 20$$

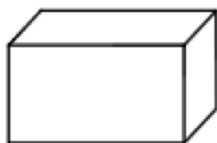
$$60 \times 70$$

Regular Packet
8 burgers



£1.59

Large Packet
24 burgers



£4.79

Which is better value for money?