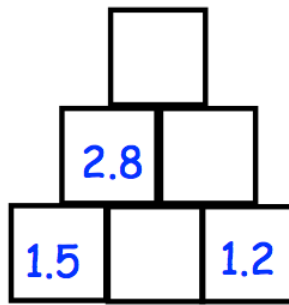




The number in each block is found by adding the two blocks directly beneath it.

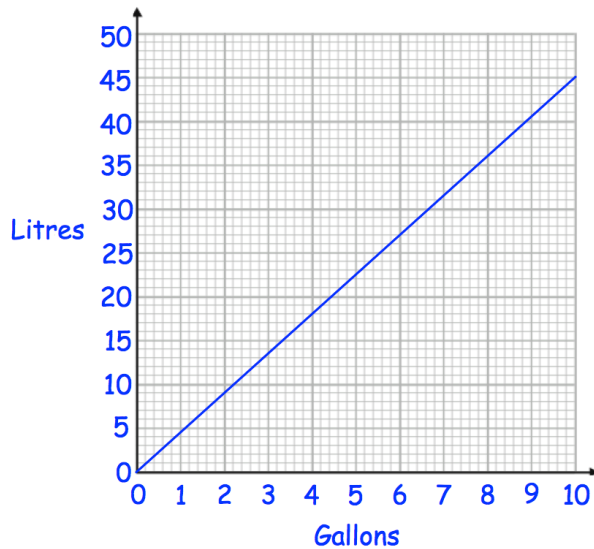
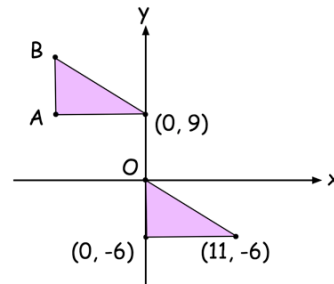
Find the missing numbers.



Find the mean of

4 2 5 8 6 4 2 3 5 1

Here are two identical triangles. Write down the coordinates of point B.



Use the graph to convert 6 gallons to litres.

Use the graph to convert 10 litres to gallons.