



Solve

$$W - 2 = 5$$

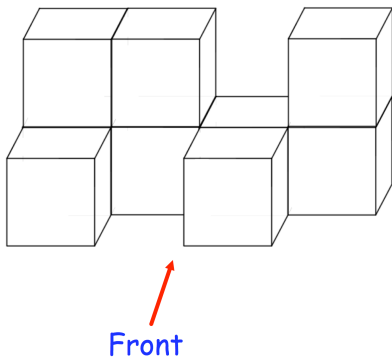
Solve

$$\frac{W}{5} = 2$$




Shown is a regular pentagon.


What is the size of each interior angle?




Draw the front elevation.



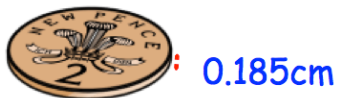
Draw the side elevation.



Draw the plan view.



Shown below is a 2 pence coin.



Each 2 pence coin is 0.185cm thick.
Kiren builds a tower of 450 2p coins.

How tall is the tower?