




Solve


$$8w = 48$$

Solve

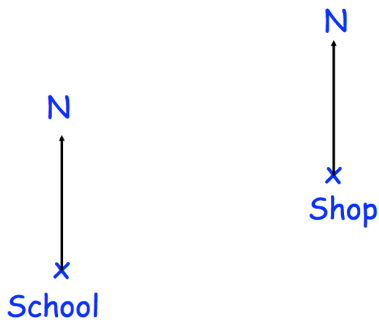
$$5y + 3 = 68$$



Draw the radius

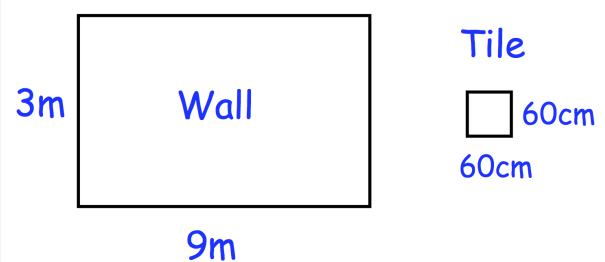


Draw the diameter



The scale of the map is 1cm = 100m.  
Work out the real distance between the school and the shop.  
Give your answer in metres.

Express 40p as a fraction of £5



Rosie is tiling her bathroom wall.  
The wall is 9m by 3m.  
Each square tile is 60cm by 60cm.  
Each tile cost £3.

Calculate the cost of tiling the wall.