

3rd March

Foundation 5-a-day



Corbettmαths

Miss Jones gives her class a test.
The test is out of 40 marks.

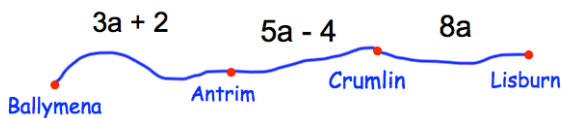
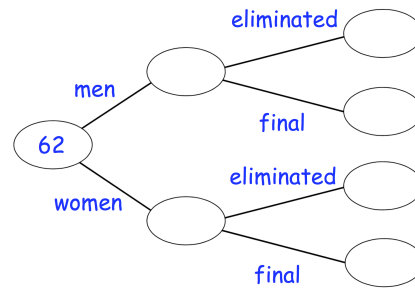
Here are their scores.

31 29 20 35
32 38 32

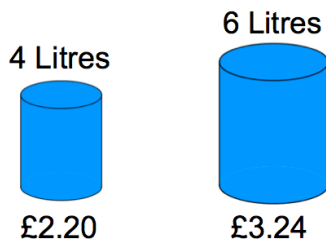
The pass mark is 75%

How many students pass?

62 people took part in a talent show
43 of the people were women.
10 people made it through to the final
and the rest were eliminated.
3 men made it through to the final.
Complete the frequency tree

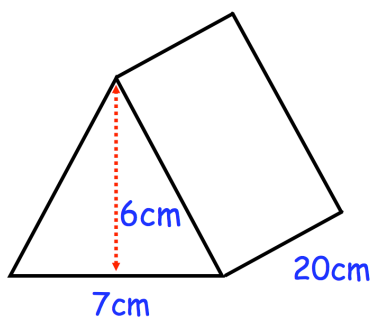


Write an expression for the distance from Antrim to Lisburn



Which size of can gives the better value for money?

Cooking oil is sold in two sizes of cans.



Find the volume of the prism.