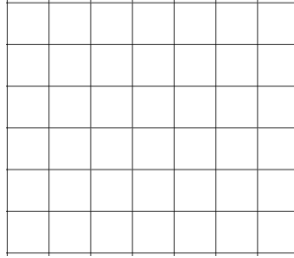
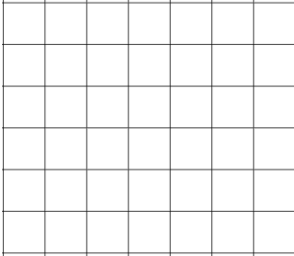


Front

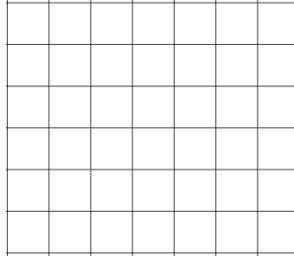
Draw the front view



Draw the side view



Draw the plan view



Write 60 as a product of primes, in index form.

Factorise $35w - 45y$

Henry and Lily share 65 sweets in the ratio 2:3.

How many sweets does each person receive?