



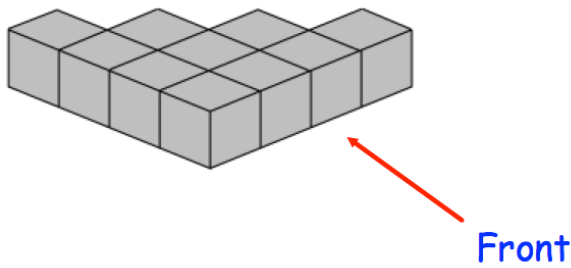
**SALE**  
**1/3 OFF ALL ITEMS**

What is the sale price?

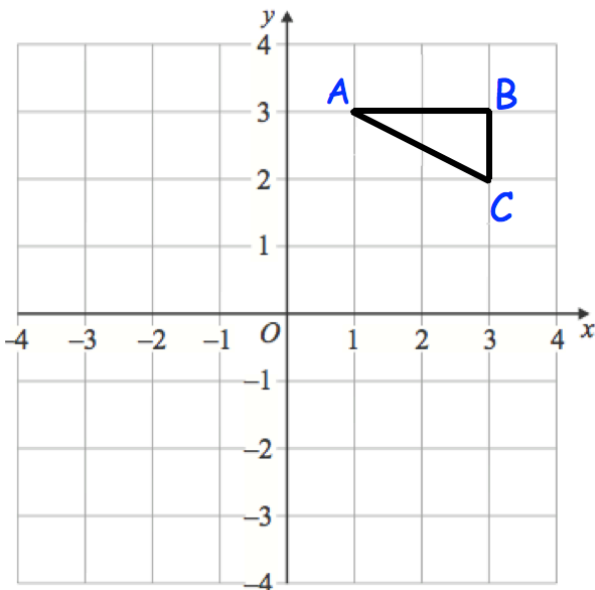

The original price of a football is £8.16

Apples cost  $a$  pence each.  
Bananas cost  $b$  pence each.

Write down an expression for the total cost, in pencil, of 6 apples and 2 bananas.



Draw the plan view



Reflect triangle ABC in the y-axis.

Label the triangle, D.

Rotate triangle ABC 90 degrees clockwise about the origin.

Label the triangle, E.