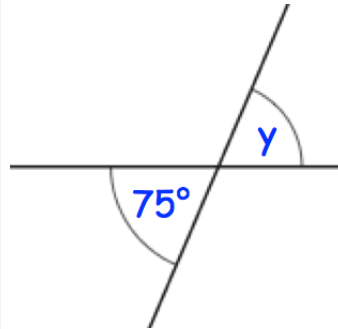
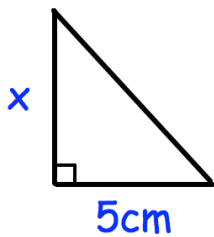




$$-20 \div 4$$

Find y The area of this triangle is 30cm^2 Find x

James saves money every week.

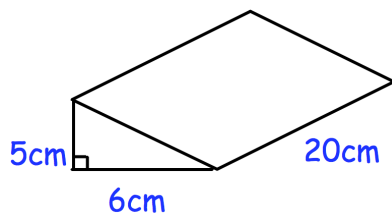
Week 1 he saves 1p

Week 2 he saves 2p

Week 3 he saves 4p

Week 4 he saves 8p and so on.

How much money does he have saved in total up to and including week 8.



Calculate the volume