



Front


Draw the front elevation



Draw the side elevation



Draw the plan view



$\frac{1}{4}$ kg of blueberries cost £1.24

Work out the cost of 2kg of blueberries

There are only red sweets and green sweets in a jar.
The ratio of red sweets to green sweets is 2:5

What fraction of the sweets are red?

Natalie, Olivia and Hugo share 240 sweets in the ratio 3:5:4

How many more sweets does Olivia have than Hugo?