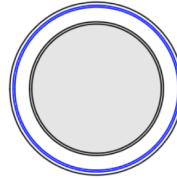




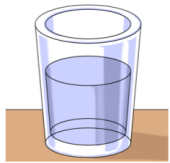
Write 3 metres in centimetres

Write 0.7 metres in centimetres


Which metric unit would you use to measure the following:



The diameter of a plate.



The amount of water in a glass



The weight of an airplane

Burger	£4.50
Salad	£2.75
Chips	£2.85
Drink	£1.80

Jude buys a burger, a salad and a drink.

How much change will he get from £10?

The temperatures in a city over a six days in December were:

1°C 3°C -2°C 0°C 4°C -8°C

Arrange the temperatures in order, starting with the warmest.