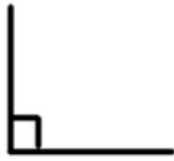


11th August



Corbettmαths

Draw a right angle



Draw and label a reflex angle

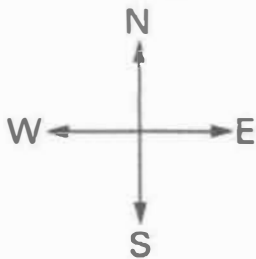



Write 190,080 in words.

One hundred e ninety thousand and eighty

What fraction of the grid is shaded?

$$\frac{14}{20} = \frac{7}{10}$$



Demi is facing South. He turns clockwise through 270 degrees.

Which direction is she now facing?

East

A greengrocer sold:
 10 apples
 6 bananas
 8 oranges
 5 lemons

Apple	○ ○ ○ ○ ○ ○
Banana	○ ○ ○
Orange	○ ○ ○ ○
Lemon	○ ○ ○ ◐

Draw a pictogram to represent this

Key ○ = 2 pieces of fruit