
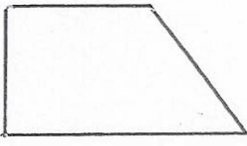
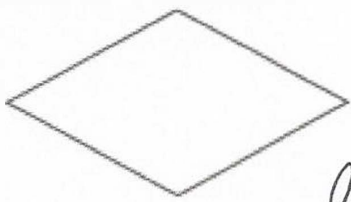
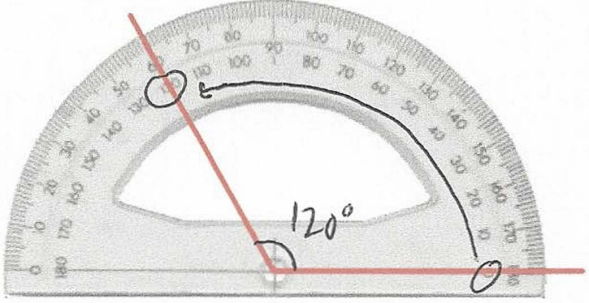


<p>15th December</p>		 CorbettmOths
<p>Draw a trapezium</p> 	<p>Name this shape</p>  <p style="text-align: right;"><i>Rhombus</i></p>	
<p>Seren has been asked to draw a 60 degree angle. Explain her mistake.</p> <p><i>The angle is obtuse, so is 120°. Seren has read the incorrect number off the protractor</i></p>		
<p>There are 32 bars of chocolate in a box. Mr Jenkins buys 192 bars of chocolate in total. How many boxes did he buy?</p>	<p style="text-align: center;"> 32 64 96 128 160 192 </p> <p style="text-align: right;"><i>6 boxes</i></p>	
<p>Find 25% of 36 $36 \div 4 = 9$</p> <p style="text-align: center;"><i>9</i></p>	<p>Find 75% of 36 $9 \times 3 = 27$</p> <p style="text-align: center;"><i>27</i></p>	
<p>The first term of a sequence is 10. The rule for finding the next term in the sequence is "multiply by 2." Write down the first 5 terms of the sequence</p>	<p style="text-align: center;"><i>10 20 40 80 160</i></p>	