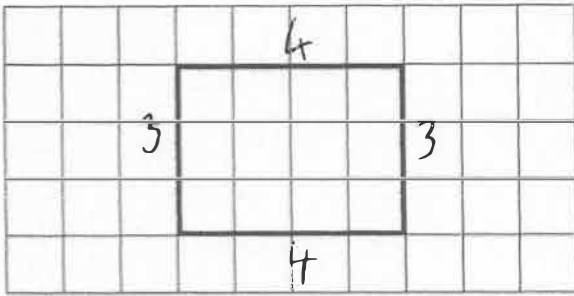


14th July



Corbettmaths



The rectangle is drawn on a centimetre grid.

Work out the perimeter

14cm


A cup costs £1.45

What is the cost of four cups?

$$\begin{array}{r} £1.45 \\ \times 4 \\ \hline 5.80 \end{array}$$

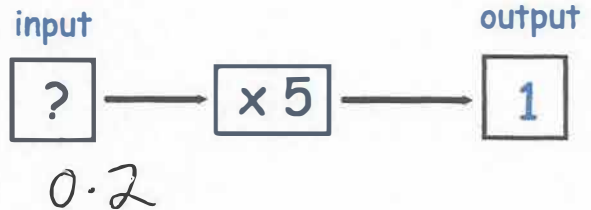
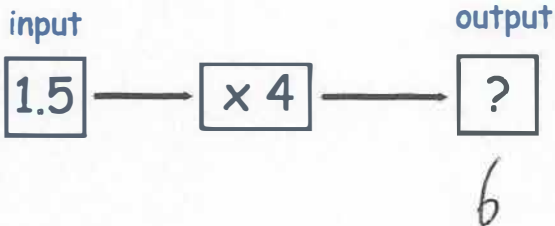
£5.80

Niroon sat a test.  
The test had 60 questions, each worth one mark.  
He got three-quarters of the questions correct.  
How many questions did Niroon get correct?



$$60 \div 4 = 15$$

$$15 \times 3 = 45$$



Convert 4 metres into centimetres

400 cm

Convert 8 kilometres into metres

8000 m