




30th July	
<p>List the first 5 multiples of 3</p> <p>3 6 9 12 15</p>	<p>List the factors of 10</p> <p>1 2 5 10</p>
<p>15 26 35 37 40 54 60 72</p> <p>From the list write down:</p> <p>A factor of 30</p> <p>15</p>	<p>A multiple of 7</p> <p>35</p>
<p>Draw a radius on the circle</p> 	
<p>Draw an arc on the circle</p>	
<p>Nayeem buys a ruler for 80p and two pencils.</p> <p>Both pencils cost the same price.</p> <p>Nayeem pays with a £5 note and receives £3.10 change.</p>	<p>How much does one pencil cost?</p> $\begin{array}{r} 5.00 \\ - 3.10 \\ \hline 1.90 \end{array} \text{ (cost)}$ $1.90 - 0.80 = \text{£}1.10 \text{ (pencils)}$ $\text{£}1.10 \div 2 = 55p$ <p>55p</p>