
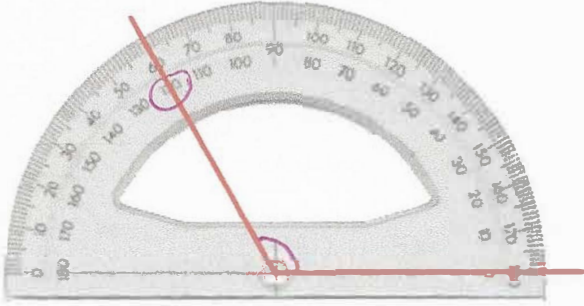



8th June	 Corbettmaths
<p>A ticket for a concert costs £15 each.</p> <p>What is the cost of 30 tickets?</p> <p><math>30 \times 15 = 450</math></p>	<p><math>£450</math></p>
<p>Imogen has been asked to draw a 60 degree angle. Explain her mistake.</p> <p>The angle is <math>120^\circ</math>, not <math>60^\circ</math>. It is an obtuse angle.</p>	
<p>At a football match there are 2942 Rovers fans and 9381 City fans.</p> <p>How many more fans did City have?</p>	<p><math display="block">\begin{array}{r} 9381 \\ - 2942 \\ \hline 6439 \end{array}</math></p>
<p>Jamie sat a test. The test had 80 questions, each worth one mark. He got 20% wrong.</p> <p>How many questions did Jamie get wrong?</p>	 <p><math>10\% = 8</math> <math>20\% = 16</math></p>
<p>Calculate the perimeter of the shape above.</p> <p><math>9 + 2 + 5 + 4 + 4 + 6 = 30</math></p> <p><math>30\text{cm}</math></p>	