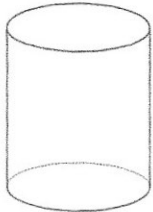
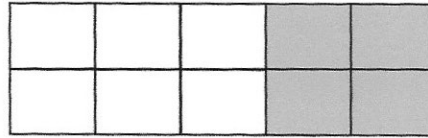




What fraction of this shape is shaded?  
Give your answer in its simplest form.

$$\frac{4}{10} = \frac{2}{5}$$



Name this solid

Cylinder

Draw the net of a square based pyramid.

37 x 18

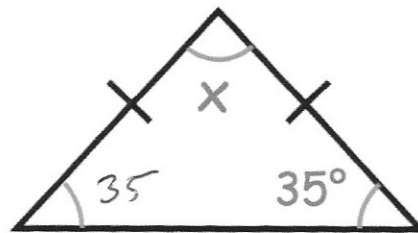
$$\begin{array}{r} 37 \\ \times 18 \\ \hline 296 \\ + 370 \\ \hline 666 \end{array}$$

2837 + 829

$$\begin{array}{r} 2837 \\ + 829 \\ \hline 3666 \end{array}$$

Find x

$$\begin{aligned} 35 + 35 &= 70 \\ 180 - 70 &= 110^\circ \\ &= \end{aligned}$$



52	2	36	100
16	4	60	54

Circle all the multiples of 4