

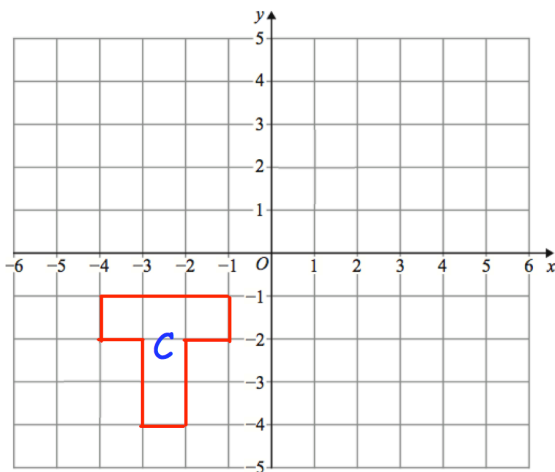
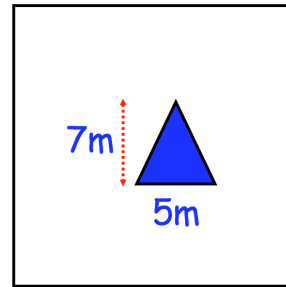


The small bottle holds 250ml.
The large bottle holds 2L.

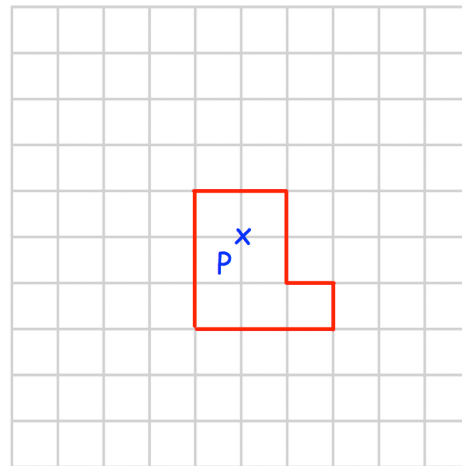
How many times larger is the large bottle?

The perimeter of a square grass field is 60m. In the field, there is a triangular pond.

Find the area of the field that is grass.



Translate C by $\begin{pmatrix} -1 \\ 5 \end{pmatrix}$



Enlarge by scale factor 2

Write 66 as a product of primes