

11th October

Numeracy 5-a-day

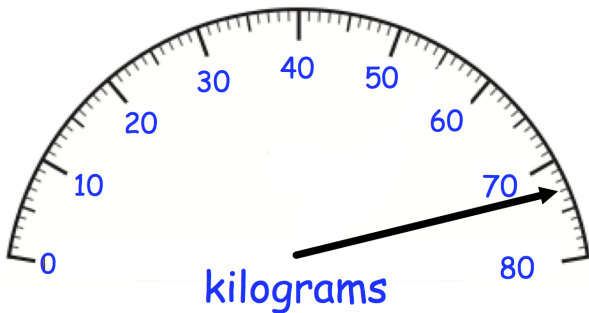
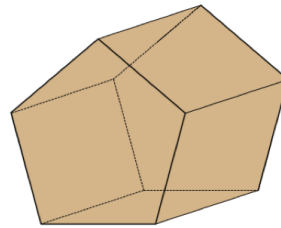


Corbettmαths

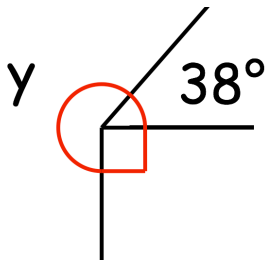
$93 + 15$

$98 - 39$

Shown is a pentagonal prism.
How many vertices does it have?



What weight is shown on the scales?



Find y

Work out

$(5 \times 4)^2$