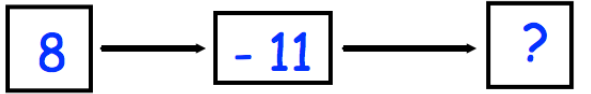


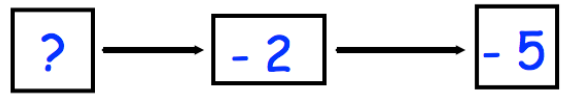


input



output

input




output


James has 86 marbles and Hannah has 95 marbles.

How many marbles do they have altogether?

Draw a diameter on the circle



Draw an arc on the circle



A football team gets 3 points for a win, 1 point for a draw and 0 points for a loss.

Southampton have played 8 matches and have 11 points.

Write down a way that Southampton could have been given 11 points.

Number of wins \_\_\_\_\_

Number of draws \_\_\_\_\_

Number of losses \_\_\_\_\_