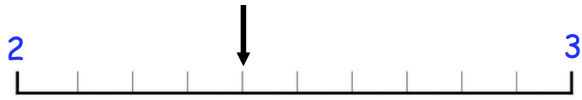
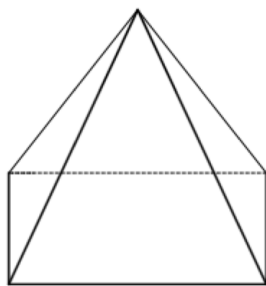




What number is the arrow pointing to?

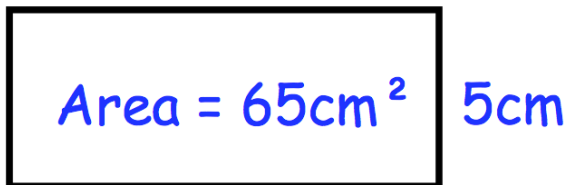


Write down all the factors of 44



How many edges does a square-based pyramid have?

$y$



Find the length of the rectangle,  $y$ .

Simplify the ratio 40:8