



Solve

$$y + 2 = 16$$

Match each label and diagram.

Label

Diagram

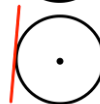
Circle and radius



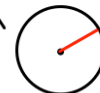
Circle and segment



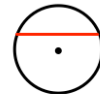
Circle and arc



Circle and diameter



Circle and tangent



Circle and chord



Work out 130% of 80

Calculate the nth term

2 6 10 14 ... ..

Is 501 a term in the sequence?

Estimate

$$\frac{5.9 \times 20.12}{4.07}$$