

















 = 2 hours of sunshine

Norwich						
Dublin						
Belfast						

How many hours of sunshine were there in Belfast?

A machine takes 10p, 20p and 50p coins.

Complete the table to show all the different ways of paying exactly 60p.

Number of 50p coins	Number of 20p coins	Number of 10p coins
0	0	6

21×8

$212 + 93$

$9000 - 825$

$9.3 + 1.9$