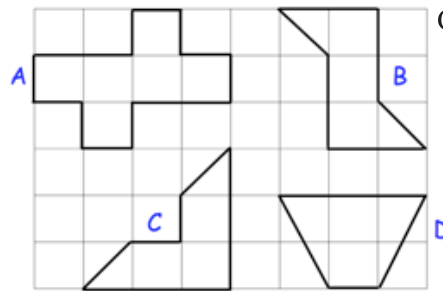
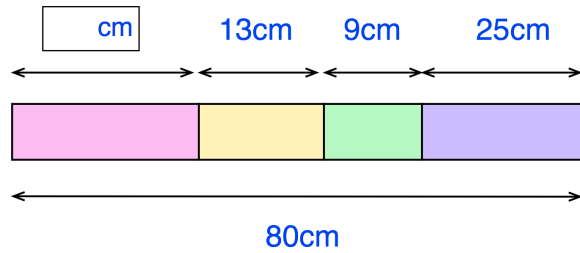




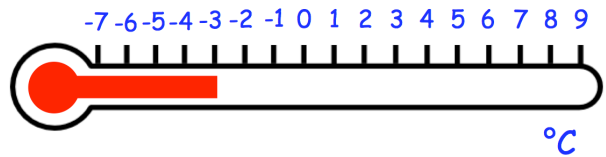
Which two shapes have a line of symmetry?



Calculate the length of the first block.



The thermometer shows the temperature at 6am.  
The temperature increases by 9°C by 10am.



What is the temperature at 10am?

Mrs Jones gave her class a test.  
Two fifths of the class failed the test.  
There are 25 students in the class.



How many failed the test?

Work out  $149 \times 34$