





Write down the smallest integer that satisfies $6x - 1 > 31$



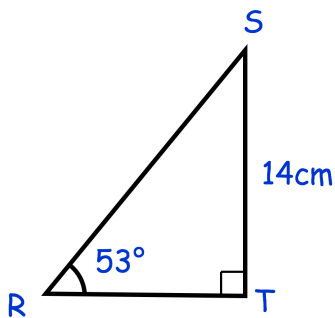
Draw a segment



Draw a tangent

Write 2.5×10^5 as an ordinary number

Write 3.8×10^{-3} as an ordinary number



Find the length of the side RT.

Work out 8^{-2}