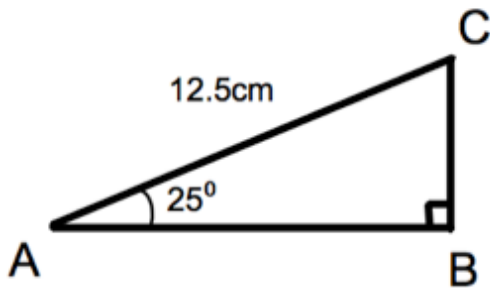




Write 8200000 in standard form.

Write 0.0000491 in standard form.



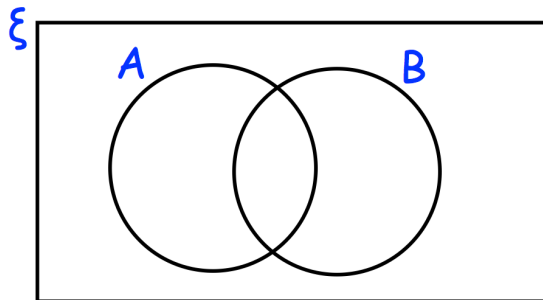
Calculate the length of BC.

$\xi = \{1, 2, 3, 4, 5, 6, 7, 8, 9, 10, 11, 12, 13, 14, 15, 16\}$

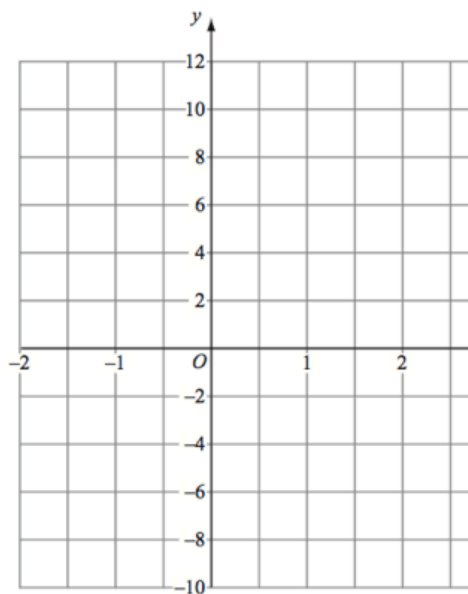
A = multiples of 3

B = multiples of 4

Complete the Venn diagram



On the grid, draw  $y = 2x^2 + x - 8$  from  $x = -2$  to 2



Work out  $5^{-3}$