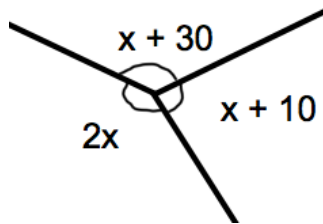




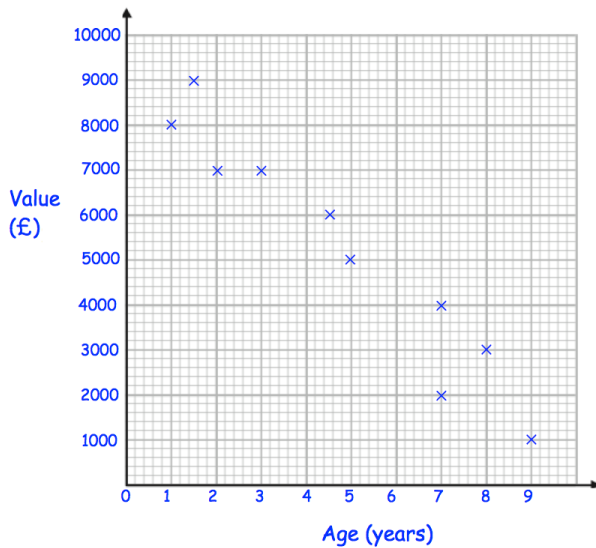
Michael organises his books into groups of 32. He then organises them into groups of 28.

What is the smallest possible number of books that Michael has.

Three angles meet at a point.

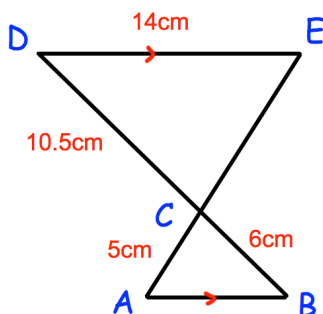


Calculate the size of the largest angle.



Describe the relationship shown in the scatter diagram.

Explain why it may **not** be appropriate to use your line of best fit to estimate the value of a 15 year old car.



ACE and BCD are straight lines.
 DE is parallel to AB .
 Work out the size of AB .