

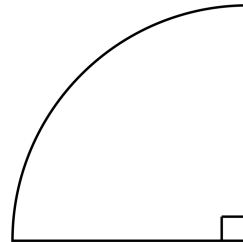


The bearing of A from B is 098°

Find the bearing of B from A.

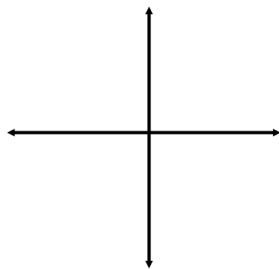
Find the area.

Give your answer in terms of π

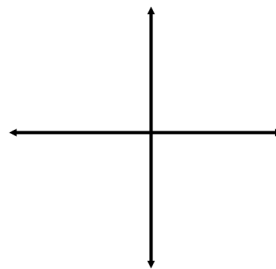


14cm

Work out the LCM of 28 and 42



Sketch $y = x^3$



Sketch $y = -x^3$

A full box holds 50 CDs to the nearest 10.

What is the greatest number of CDs that 8 boxes would hold?