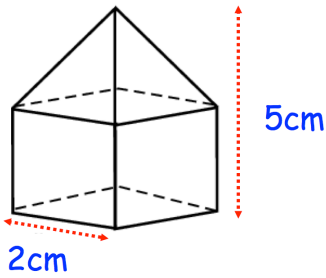
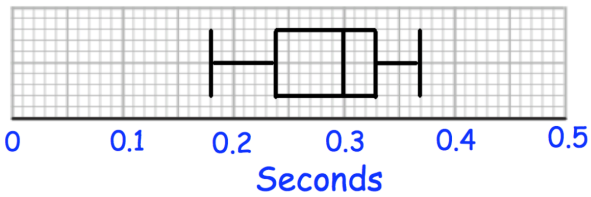




Write  $16\text{cm}^3$  in  $\text{mm}^3$

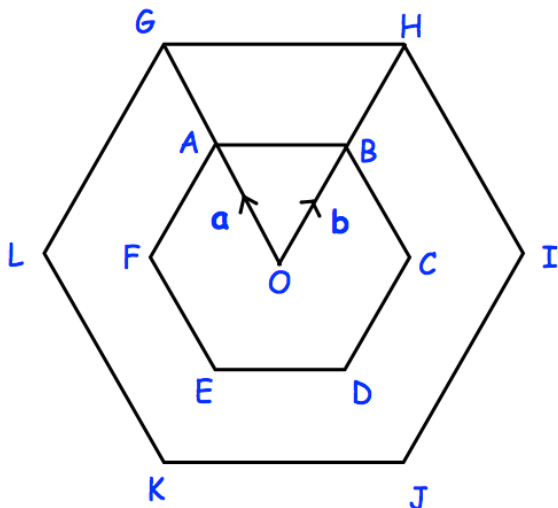


A shape is made from a cube and a pyramid.  
Calculate the volume.



What is the range?

What is the interquartile range?



Write down a vector for  $\overrightarrow{OG}$

Write down a vector for  $\overrightarrow{IK}$

ABCDEF and GHIJKL are regular hexagons with centre O.  
GHIJKL is an enlargement of ABCDEF, with scale factor 2.