



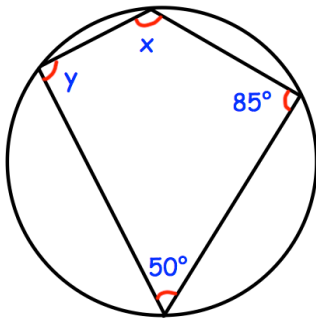
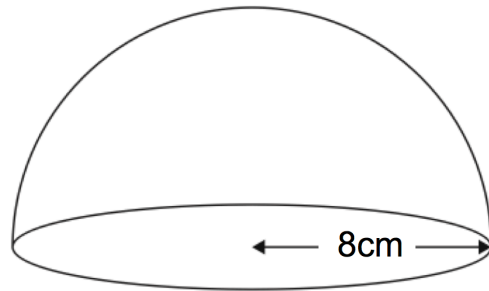
Expand and simplify

$$(5w + 1)(3w + 2)$$

Expand and simplify

$$(y - 8)^2$$

Find the volume of this hemisphere

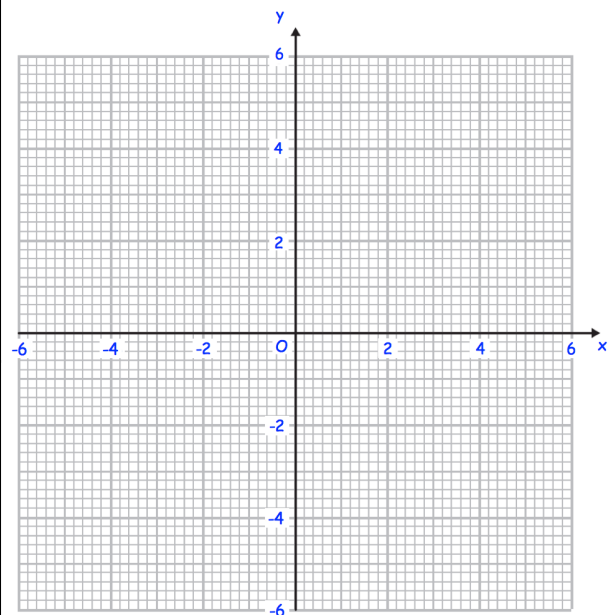


Find x and y .

Complete the table of values for

$$y = \frac{2}{x}$$

x	-5	-2	-1	-0.5	0.5	1	2	5
y								



On the grid, draw the graph of

$$y = \frac{2}{x}$$