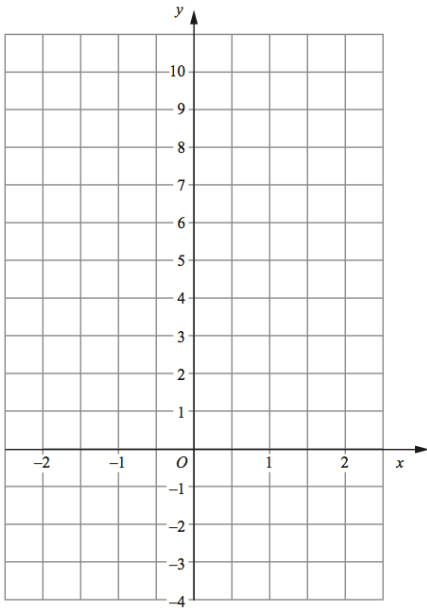
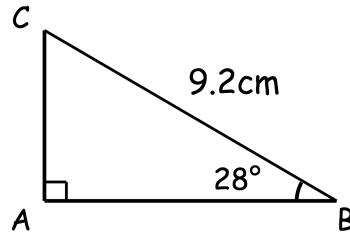




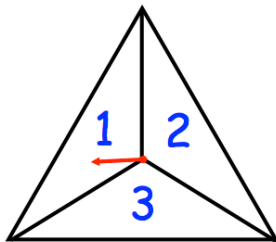
Find the perimeter of triangle ABC.
Give your answer to 3 significant figures.



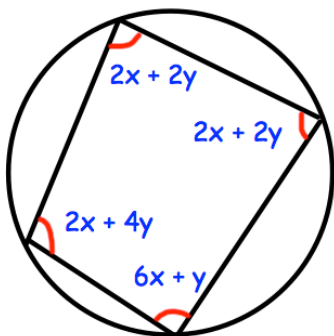
Complete the table of values for $y = 3^x$

x	-2	-1	0	1	2
y					

Draw the graph of $y = 3^x$
for values of x from -2 to 2



A fair spinner is spun twice.
A score is found by adding the two numbers together.
Find the probability of a score of 6



Find x and y