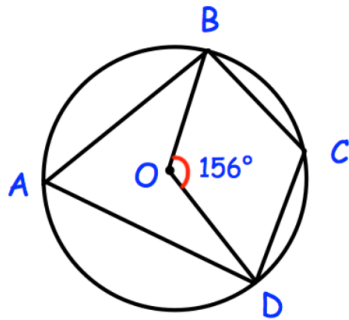




Simplify

$$(5xy^2)^3$$




Find the size of BCD.

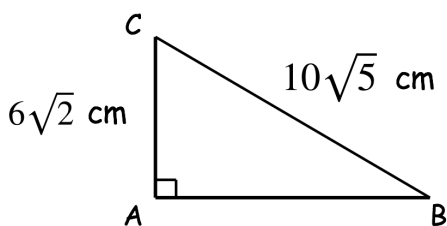
Simplify $\sqrt{27}$

Simplify $\sqrt{300}$

The lightest female rugby player is 51kg.
 The lower quartile is 60kg.
 The median is 71kg.
 The range is 32kg and interquartile range is 14kg.



Draw a box plot to show this information



Find the length of AB (non-calculator)
 Give your answer in the form $a\sqrt{b}$