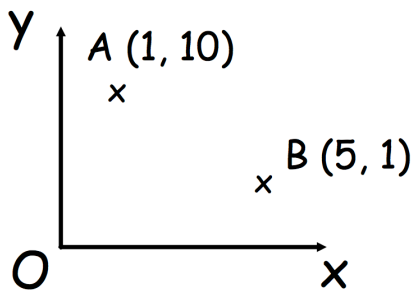


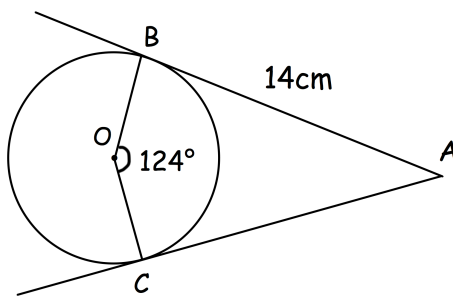


Work out

$$\frac{(4.2 \times 10^3) \times (3 \times 10^5)}{2 \times 10^{11}}$$

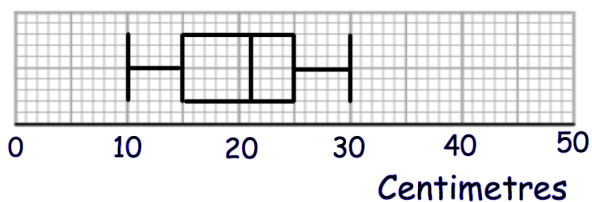


Find the equation of the straight line that passes through AB.

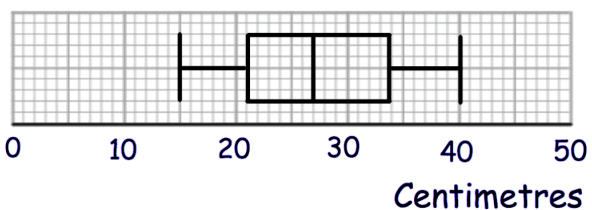


Find OB.

Length of red squirrels



Length of grey squirrels



Shown are the lengths of some red and grey squirrels.

Compare the distributions of their lengths.