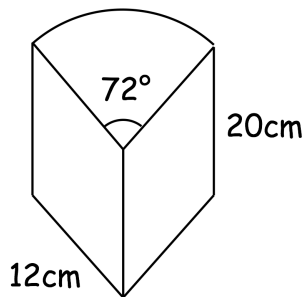
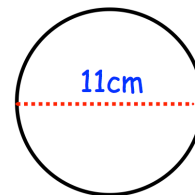
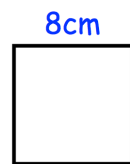
Find x Simplify $\sqrt{80}$ 

Calculate the volume of the prism.

Will the square fit inside the circle without touching the circle?



Work out

$$\left(\frac{169}{225}\right)^{\frac{1}{2}}$$