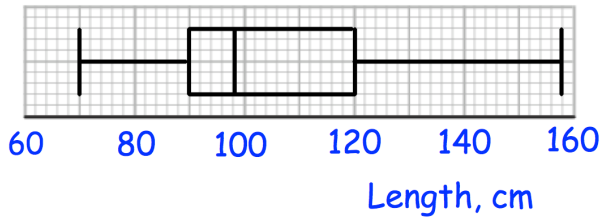


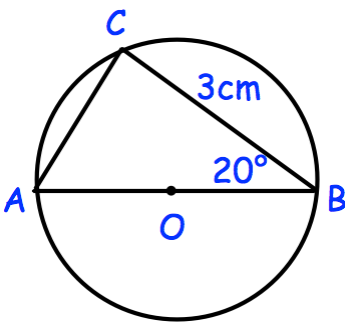


40 people visited a swimming pool.
 There are 23 adults.
 9 adults wore goggles.
 4 children did not wear goggles.
 How many children wore goggles?



Find the median.

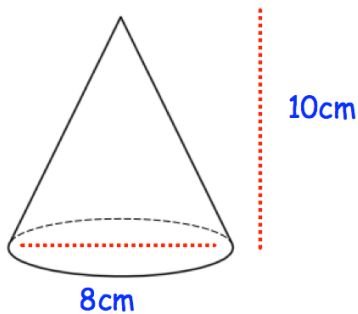
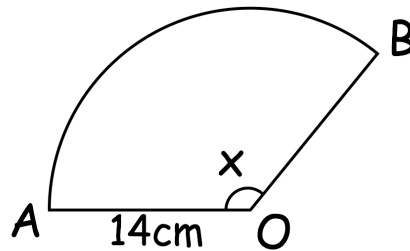
Find the interquartile range.



Find the area of the circle.

Give your answer to 1 decimal place.

The area of sector OAB is 165cm^2
 Find x .



Calculate the volume of the cone.